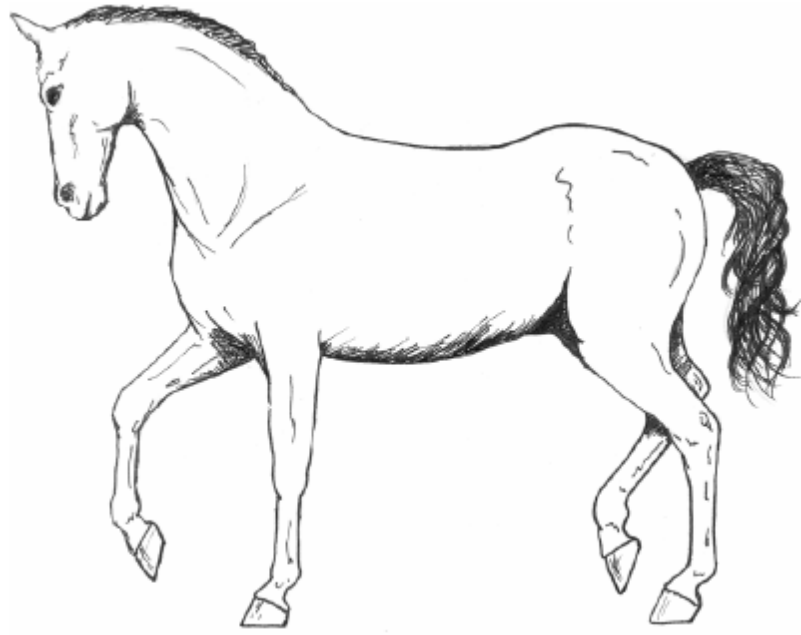


## Directional Terminology Worksheet

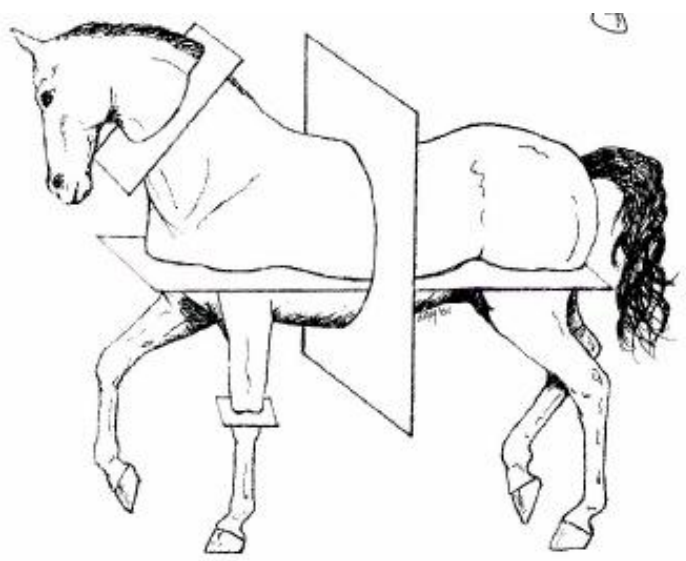

Directions: Label the drawing with the directional terms:

- |         |         |          |           |
|---------|---------|----------|-----------|
| Cranial | Caudal  | Proximal | Distal    |
| Dorsal  | Ventral | Anterior | Posterior |



Directions: Label the drawing with the 3-dimensional and surface planes. **Use colored pencils to shade each plane.**

- |          |             |        |
|----------|-------------|--------|
| Frontal  | Transverse  | Median |
| Sagittal | Superficial | Deep   |



1. Divide these animals with a **frontal** plane



2. Label the **dorsal** and **ventral** regions of these animals



3. Divide these animals into a **median** and a **sagittal** plane



4. Label these animals as being a **lateral**, **posterior**, or **anterior** view.



5. Label the **cranial** and **caudal** regions on these animals



6. Divide these animals with a **transverse** plane.



7. Label the **proximal** and **distal** on the horse's legs and the parrot's tail.

